


Name _____


Area and Perimeter Quiz

Give the area and perimeter of each polygon below.




1. ↑ A = _____

P = _____



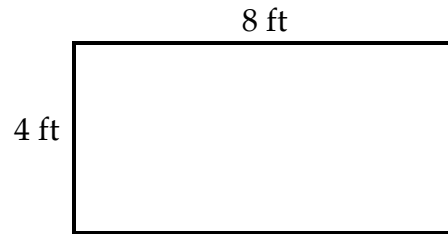
2. ↑ A = _____

P = _____



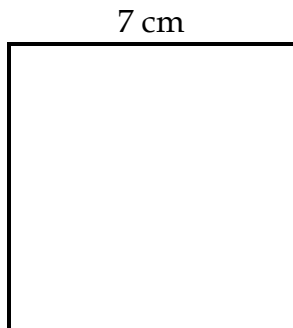
3. ↑ A = _____

P = _____



4. ↑ A = _____

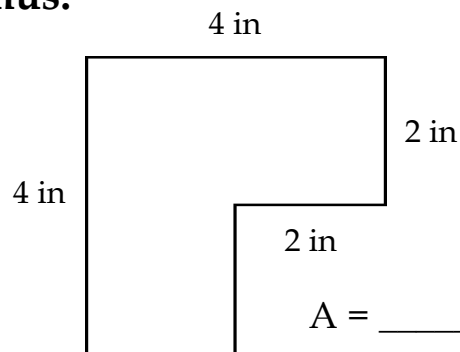
P = _____



5. ↑ A = _____

P = _____

Bonus:



A = _____

P = _____